

NAME \_\_\_\_\_

SCHOOL \_\_\_\_\_

Disclaimer: This packet is intended ONLY for the use of students enrolled in Leon County Schools.

**Grade K**  
**Geography**  
Multicultural/ Women's History Reading

**Standards:**

SS.K.G.1.1 Describe the relative location of people, places, and things by using positional words.

SS.K.G.1.2 Explain that maps and globes help to locate different places and that globes are a model of the Earth.

SS.K.G.1.3 Identify cardinal directions (north, south, east, west).

SS.K.G.1.4 Differentiate land and water features on simple maps and globes.

**Florida Statutes (1003.42):**

(h) The history of African Americans, including the history of African peoples before the political conflicts that led to the development of slavery, the passage to America, the enslavement experience, abolition, and the contributions of African Americans to society. Instructional materials shall include the contributions of African Americans to American society.

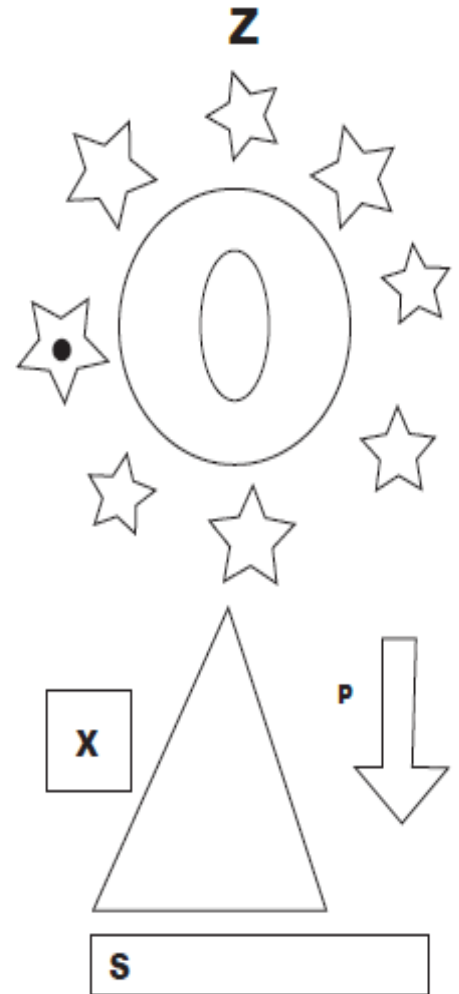
(q) The study of women's contributions to the United States.

Resources:  
education.com  
ReadWorks.org  
Superteachersworksheet.com

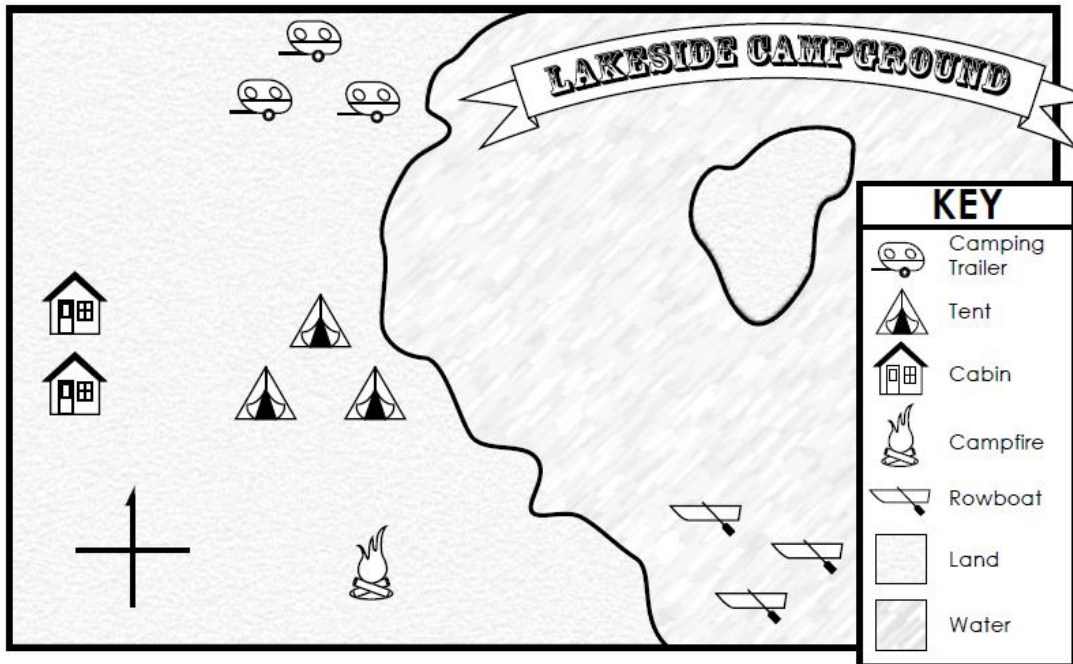
# Position and Direction

Look at the illustration on the right.  
Then circle the correct answers below.

1. The stars are ( **around** / **within** ) the circle.
2. The X is ( **outside** / **inside** ) the square.
3. The arrow is on the ( **left** / **right** ) of the triangle.
4. The arrow is pointing ( **south** / **east** ).
5. The oval is ( **around** / **within** ) the circle.
6. The S is on the ( **left** / **right** ) side of the rectangle.
7. The Z is ( **north** / **south** ) of the rectangle.
8. The star with a black dot is ( **west** / **east** ) of the oval.
9. The triangle is ( **below** / **above** ) the rectangle.
10. The P is to the ( **left** / **right** ) of the arrow.



## Reading a Map



1. Label **N**, **S**, **E**, and **W** on the compass rose.
2. Color the land **green** and the water **blue**.

Write **north**, **south**, **east**, or **west** to complete each sentence.

3. The rowboats are \_\_\_\_\_ of the campfire.
4. The camping trailers are \_\_\_\_\_ of the tents.
5. The cabins are \_\_\_\_\_ of the tents.
6. The campfire is \_\_\_\_\_ of the camping trailers.
7. The island is \_\_\_\_\_ of the cabins.

## Maps and Globes

Imagine you are on a camping trip with your family. You need to find the place where you are going to camp. You're in the mountains and phones don't work there. What might you use to find your way?

You might use a map! Maps are pictures of a place on Earth. These pictures are printed or drawn on something flat, like a big piece of paper. Maps can help you find your way. Different maps can show you different things. Some maps may show you the roads and rivers near a mountain. Some maps may show you where different towns and cities are. Other maps may even show you where different countries and oceans are!

If you're in your classroom, look around. Do you see a globe? A globe is a round ball with a map of Earth on it. You can find the Earth's oceans on a globe. You can find the Earth's countries on a globe.

Now take a look at these two photos. Which one shows a map? Which one shows a globe?

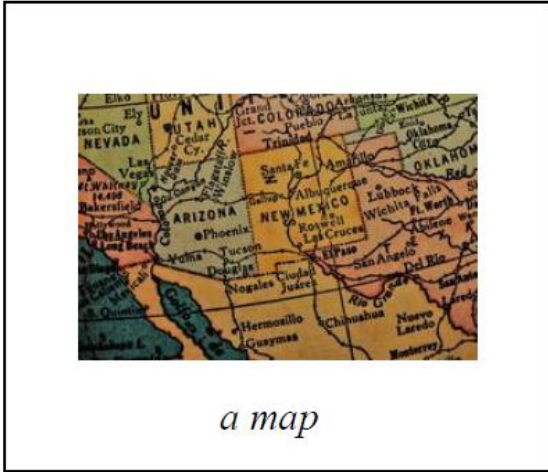
NAME \_\_\_\_\_

SCHOOL \_\_\_\_\_





Name: \_\_\_\_\_ Date: \_\_\_\_\_

1. What can help you find your way around a mountain?



2. What is a map drawn on?



**3. What is a globe a map of?**



*the entire Earth*



*roads and rivers*

**4. What shape is a globe?**



*a flat rectangle*



*a round ball*

NAME \_\_\_\_\_

SCHOOL \_\_\_\_\_

**5. What can maps show you?**

Maps may show you \_\_\_\_\_.

---

---

---

---

---

---

---

---

**6. What did you learn from "Maps and Globes"?**

---

---

---

---

---

---

---

---

**7. Draw a picture of a map.**



## Women's History Month

by ReadWorks

March is Women's History Month. It is a time for thinking about women who have made a big difference in the world. Some of these women lived hundreds of years ago. Some of them are alive today.

One woman who made a big difference is Harriet Tubman. She was born in the United States around 1820. She was a slave. After she grew up, she ran away. Now she was free!



*Harriet Tubman*

The next year she came back to help her sister escape. She came back again and again. Each time she helped more slaves escape.

The United States decided to honor women like Harriet Tubman in 1981. That was when Women's History Week began. Six years later, it became Women's History Month.

NAME \_\_\_\_\_

SCHOOL \_\_\_\_\_

**ReadWorks®**

Women's History Month - Comprehension Questions

---

Name: \_\_\_\_\_ Date: \_\_\_\_\_

**1. When is Women's History Month?**

- A. March
- B. April

**2. Women's History Month is a time to think about**

- A. women
- B. fathers

**3. Harriet Tubman helped**

- A. slaves
- B. slave owners

**4. When did Women's History Week begin?**

- A. 1981
- B. 1820

NAME \_\_\_\_\_

SCHOOL \_\_\_\_\_

**ReadWorks®**

Women's History Month - Comprehension Questions

**5. Which picture shows someone who is celebrated during Women's History Month?**



*Abraham Lincoln*



*Harriet Tubman*